


What did I learn?

Answer the questions to show how much you have learnt about Australian coins.

1. Which side of the coin is being shown in each picture?
Circle your answer.



Heads

Tails



Heads

Tails




Heads

Tails

2. Circle the 5 cent coin and put a line under the \$2 coin.



3. In the box, circle the coin with the highest value.



What did I learn?



1. In the box, circle the coin with the lowest value.



2. How much money is in the piggy bank?
Write your answer underneath.



3. In the piggy banks, draw two different ways to make 75 cents.




What did I learn? Solutions

1. Heads
Tails
Tails

2.



3.



4.



5. 35 cents
6. Teacher check